

Name:

3.G.1

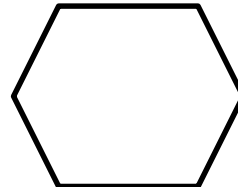
Directions: Solve each problem.

In what way(s) can this shape be classified?



- a) Polygon
- b) Rectangle
- c) Square
- d) Rhombus
- e) Quadrilateral

In what way(s) can this shape be classified?

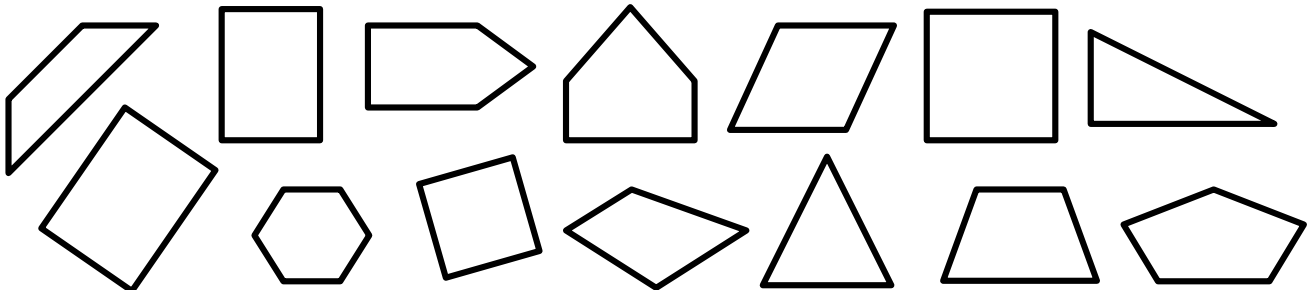


- a) Polygon
- b) Quadrilateral
- c) Square
- d) Hexagon
- e) Pentagon

Draw 2 different quadrilaterals.

Draw 2 different quadrilaterals that cannot be classified as a rhombus, rectangle, or square.

Circle all the quadrilaterals.

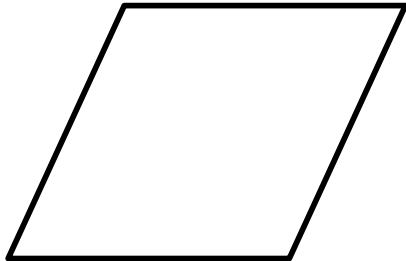


Name:

3.G.1

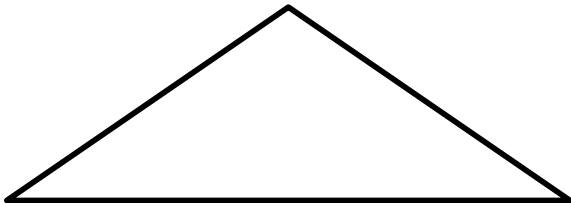
Quadrilaterals & Other Polygons

1. In what way(s) can this shape be classified?




- a) Polygon
- b) Rectangle
- c) Square
- d) Rhombus
- e) Quadrilateral

2. In what way(s) can this shape be classified?



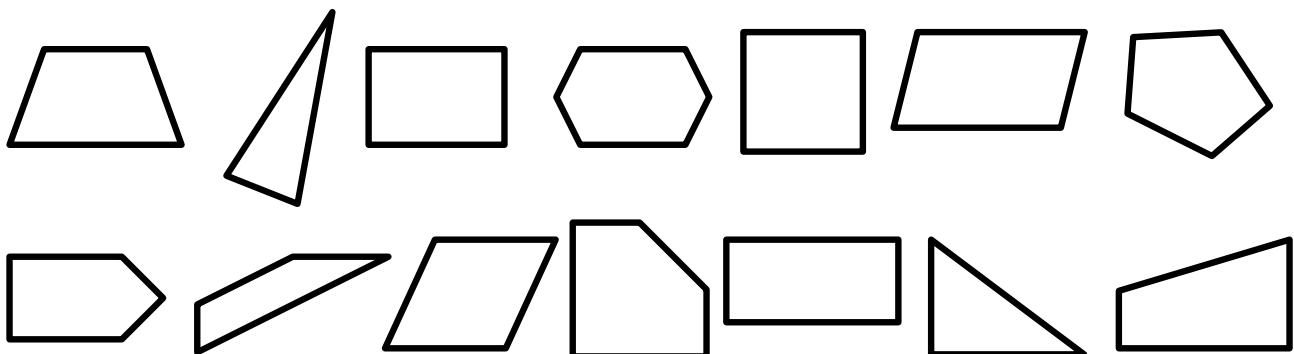
- a) Polygon
- b) Quadrilateral
- c) Square
- d) Triangle
- e) Pentagon

3. In what way(s) can this shape be classified?



- a) Polygon
- b) Rectangle
- c) Square
- d) Hexagon
- e) Quadrilateral

4. Circle all the quadrilaterals.



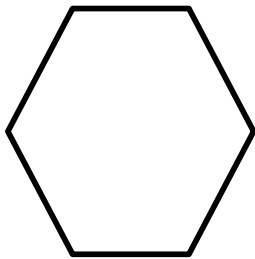
Name:

3.G.1

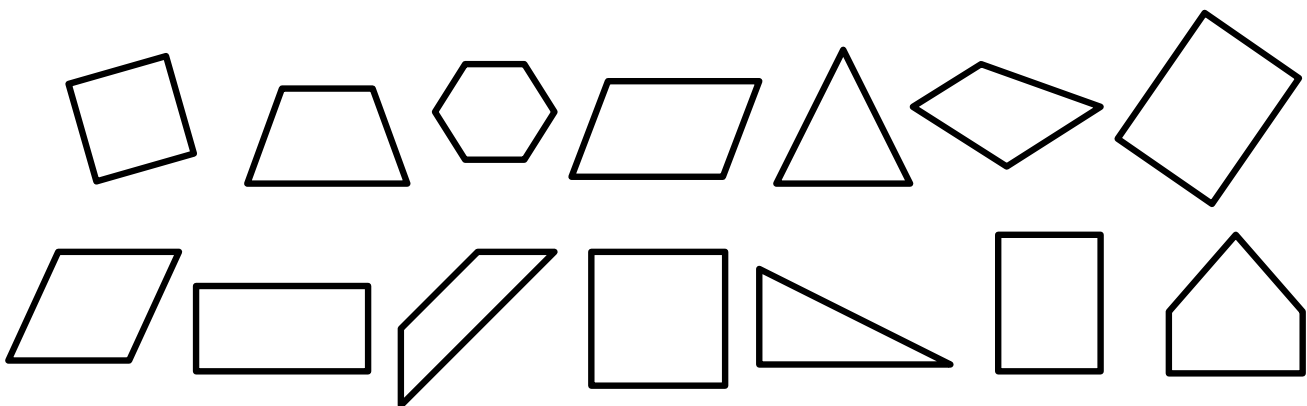
Quadrilaterals & Other Polygons

1. Draw three different quadrilaterals.
2. Draw 3 different quadrilaterals that cannot be classified as a rhombus, rectangle, or square.

3. Explain why the shape below is not a quadrilateral.



4. Circle all the rectangles, rhombuses, and squares.

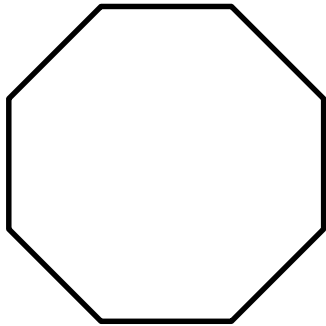


Name:


3.G.2

Directions: Solve each problem.

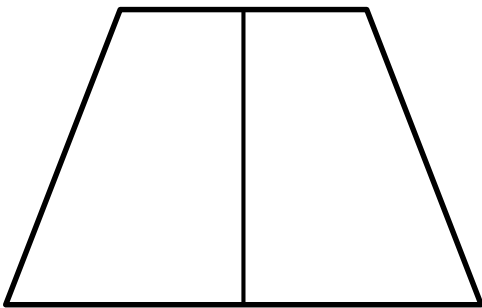
Partition the shape into 8 equal parts and label each part as a fraction of the whole.



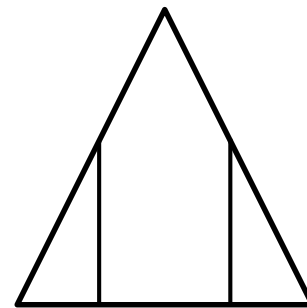
Partition the shape into 4 equal parts and label each part as a fraction of the whole.



Is this shape partitioned into equal areas? _____



Is this shape partitioned into equal areas? _____



Partition the shape into 6 equal parts and label each part as a fraction of the whole.




Name:

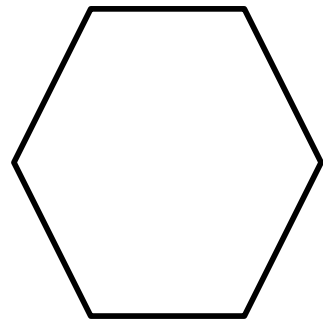
3.G.2

Partition Shapes

1. Partition the shape into 6 equal parts and label each part as a fraction of the whole.



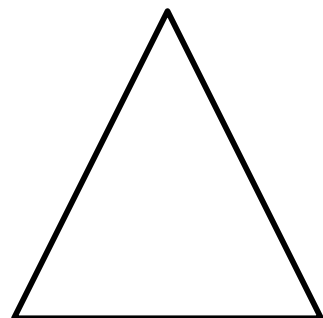
2. Partition the shape into 4 equal parts and label each part as a fraction of the whole.



3. Partition the shape into 8 equal parts and label each part as a fraction of the whole.



4. Partition the shape into 2 equal parts and label each part as a fraction of the whole.




Name: _____

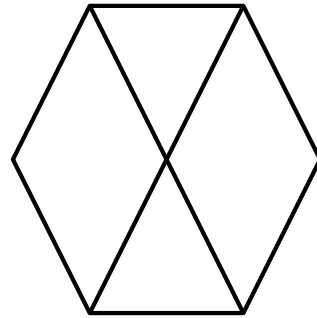
3.G.2

Partition Shapes

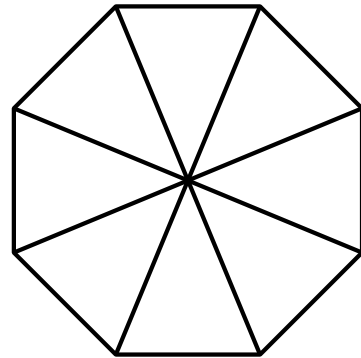
1. Is this shape partitioned into equal areas? _____



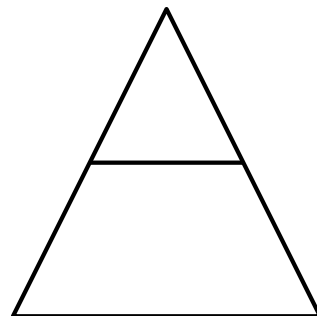
2. Is this shape partitioned into equal areas? _____



3. Is this shape partitioned into equal areas? _____



4. Is this shape partitioned into equal areas? _____



Name:

**Geometry
Test**

Geometry Test

3.G.1

List two attributes of this shape.



3.G.1

List two attributes of this shape.



3.G.1

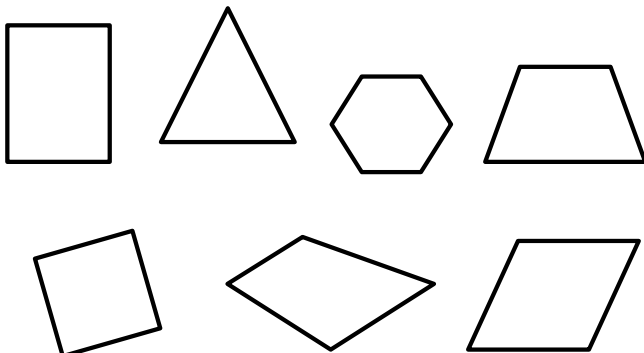
Draw 2 different quadrilaterals.

3.G.1

Draw two shapes that are not quadrilaterals.


3.G.1

Circle all the quadrilaterals.



3.G.1

Circle all the rectangles, rhombuses, and squares.



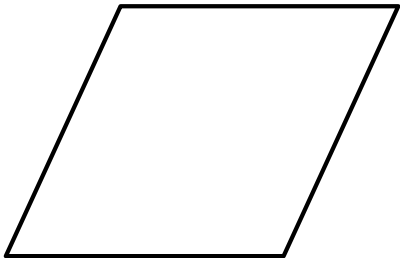
Name:

**Geometry
Test**

Geometry Test

3.G.2

Partition the shape into 2 equal parts and label each part as a fraction of the whole.




3.G.2

Partition the shape into 3 equal parts and label each part as a fraction of the whole.



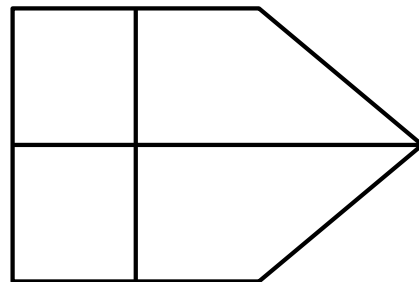
3.G.2

Partition the shape into 4 equal parts and label each part as a fraction of the whole.




3.G.2

Is this shape partitioned into equal areas? _____



3.G.2

Is this shape partitioned into equal areas? _____



3.G.2

Is this shape partitioned into equal areas? _____

